

NEW BHARATH MATRICULATION HIGHER SECONDARY SCHOOL
THIRUVARUR – 610001
TERM-2

SUBJECT: Maths

CLASS:UKG

1. Write the missing numbers.

101 102 103 104 105 106 107 108 109 110

121 122 123 124 125 126 127 128 129 130

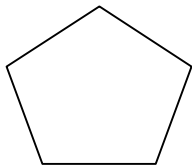
151 152 153 154 155 156 157 158 159 160

161 162 163 164 165 166 167 168 169 170

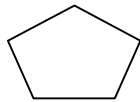
181 182 183 184 185 186 187 188 189 190

191 192 193 194 195 196 197 198 199 200

2. Arrange the picture in Sequence:



3



1




2



2




3



1



1



2



3

3. Write ascending order:-

1. 4, 1, 3, 2

1, 2, 3, 4

2. 8, 7, 10, 6

6, 7, 8, 10

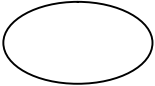



3. 9, 11, 10, 8

8, 9, 10, 11

4. 0, 6, 4, 2

0, 2, 4, 6

4. See the Picture and write the shaper name.

- | | | |
|----|-------------------------------------------------------------------------------------|-----------|
| 1. |  | Circle |
| 2. |  | Triangle |
| 3. |  | Rectangle |
| 4. |  | Square |

5. Counting in 5's up to 200

5, 10, 15
20, 25, 30, 35
40, 45, 50, 55

60, 65, 70, 75
80, 85, 90, 95
100, 105, 110, 115
120, 125, 130, 135, 140

145, 150, 155
160, 165, 170, 175
180, 185, 190, 195, 200

6. Indian Currency

1 Rupee

-



5 Rupee

-



10 Rupees Note

-



50 Rupees Note

-



500 Rupees Note

-



7. Write the Number Name:

1. 10

-

Ten

2. 60

-

Sixty

3. 90

-

Ninety

4. 100

-

Hundred

5. 40

-

Forty

8. Write in words:

1. 25 - Twenty Five
2. 28 - Twenty Eight
3. 32 - Thirty Two
4. 39 - Thirty Nine
5. 48 - Forty Eight

9. Write in figure:

1. Fifty - 50
2. Twenty Two - 22
3. Thirty Nine - 39
4. Forty Five - 49
5. Thirty Three - 33